


## Erosion and landforms

Name: \_\_\_\_\_

1. Label each of the following landforms.

(4)



\_\_\_\_\_



\_\_\_\_\_

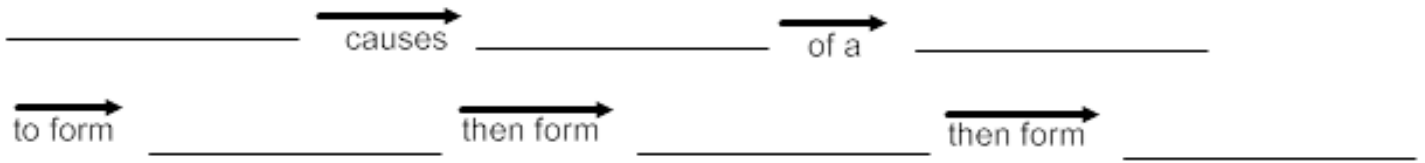


\_\_\_\_\_

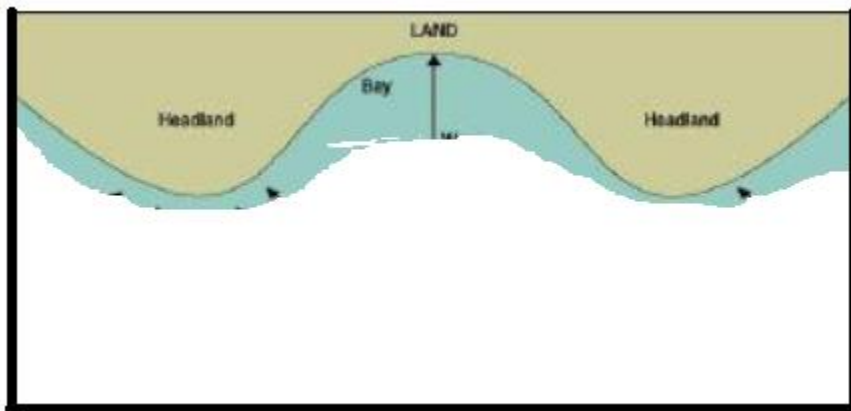


\_\_\_\_\_

2. Complete the flowchart using the following key terms: headlands, sea cave, sea stack, sea arch, waves and erosion. (6)



3. Use a diagram to show how waves interact with the shoreline. (ie use arrows to show how the waves disperse). (2)



4. What are the four ways in which waves interact with the shoreline? (4)

- a) \_\_\_\_\_
- b) \_\_\_\_\_
- c) \_\_\_\_\_
- d) \_\_\_\_\_